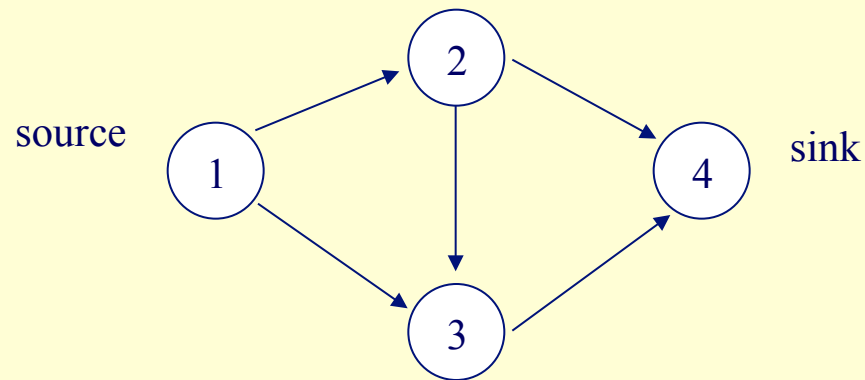


Linear Program Example

- Many problems involve “flowing” or moving some good or commodity over a network, some examples include:
 - Transportation network (vehicles)
 - Electricity (electrons)
 - Natural gas (methane molecules)
 - Coal distribution (tons of coal)
 - Project management project networks (project tasks)

Min Cost Flow Problem



let x_{ij} be the flow from
node i to node j

Nodes: $\{1,2,3,4\}$

Arcs: $\{(1,2),(1,3),(2,3),(2,4), (3,4)\}$

arc	unit cost	capacity
(1,2)	\$100	5
(1,3)	\$50	1
(2,3)	\$75	2
(2,4)	\$60	2
(3,4)	\$90	2

Min Cost Flow Problem

minimize $100x_{12}+50x_{13}+75x_{23}+60x_{24}+90x_{34}$

s.t.

Node 1: $x_{12}+x_{13}=3$

Node 2: $x_{12}-x_{23}-x_{24}=0$

Node 3: $x_{13}+x_{23}-x_{34}=0$

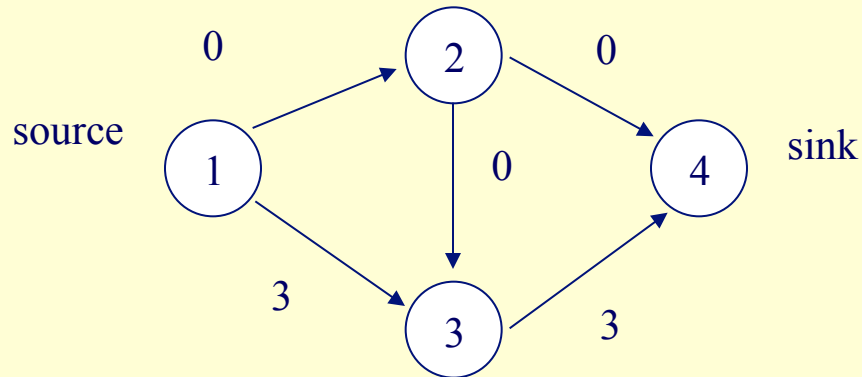
Node 4: $x_{24}+x_{34}=3$

$x_{12}, x_{13}, x_{23}, x_{24}, x_{34}$ nonnegative

arc	unit cost	capacity
(1,2)	\$100	5
(1,3)	\$50	1
(2,3)	\$75	2
(2,4)	\$60	2
(3,4)	\$90	2

Min Cost Flow Problem: Solution

Total cost = \$420



Whoops! What's Wrong?

arc	unit cost	capacity
(1,2)	\$100	5
(1,3)	\$50	1
(2,3)	\$75	2
(2,4)	\$60	2
(3,4)	\$90	2

Min Cost Flow Problem: Version 2

arc	unit cost	capacity
(1,2)	\$100	5
(1,3)	\$50	1
(2,3)	\$75	2
(2,4)	\$60	2
(3,4)	\$90	2

minimize $100x_{12}+50x_{13}+75x_{23}+60x_{24}+90x_{34}$
s.t.

Node 1: $x_{12}+x_{13}=3$

Node 2: $x_{12}-x_{23}-x_{24}=0$

Node 3: $x_{13}+x_{23}-x_{34}=0$

Node 4: $x_{24}+x_{34}=3$

$x_{12} \leq 5$

$x_{13} \leq 1$

$x_{23} \leq 2$

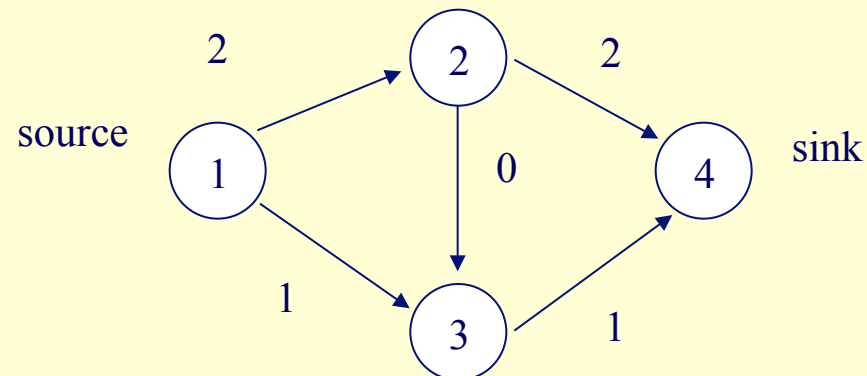
$x_{24} \leq 2$

$x_{34} \leq 2$

Forgot the capacities!

$x_{12}, x_{13}, x_{23}, x_{24}, x_{34}$ nonnegative

New solution with capacities



New total cost=\$460, why should it be greater than previous cost of \$420?